

GEOGRAPHY

Suggested use:

This is not required work for Colm Cille Club and is only provided as a helpful tool to aid in learning the Geography memory work for the year. Each packet includes a Master Map for a selected group of units, a Practice Map for every unit, and review quizzes for home use. You may print a packet for each child or print one packet and put the pages in sheet protectors. Children can then use wet erase markers to complete the practice assignments and erase them for use by the next child.

Year 2 includes:

Unit 1: The Continents and the Oceans

Level 1 - Continents and Oceans only

Level 2 - optional - this isn't part of the Memory Work but rather a chance to introduce or review the concepts of latitude, longitude and the hemispheres if your child is ready.

Units 2-9: The countries of Europe

Practice map for each unit

A review quiz after every 3 units

Units 10-12: Some European capital cities, rivers and bodies of water

Practice map for each unit

A review quiz for all 3 units

Units 13-14: Eastern Europe-Western Asia

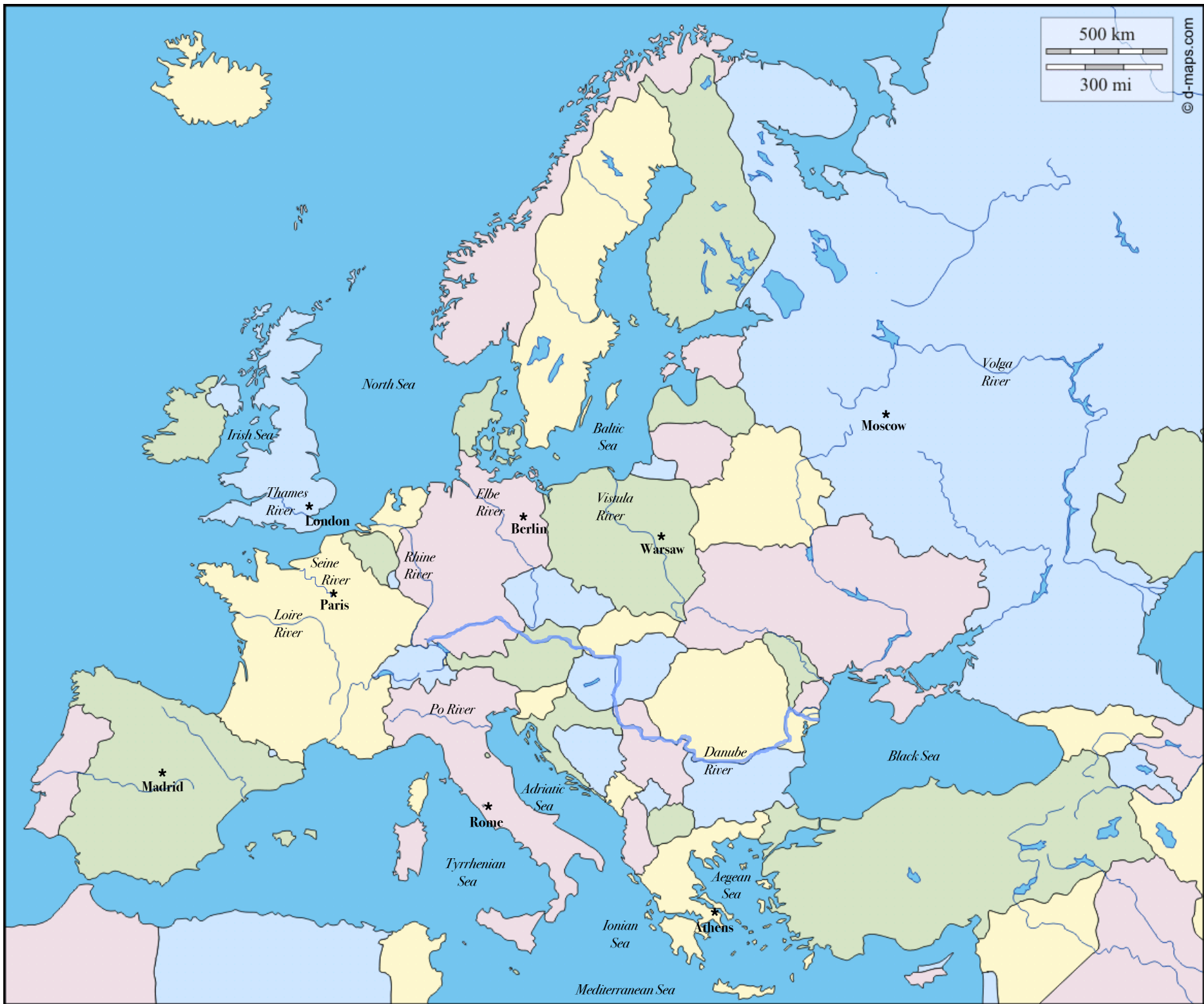
Practice map for each unit

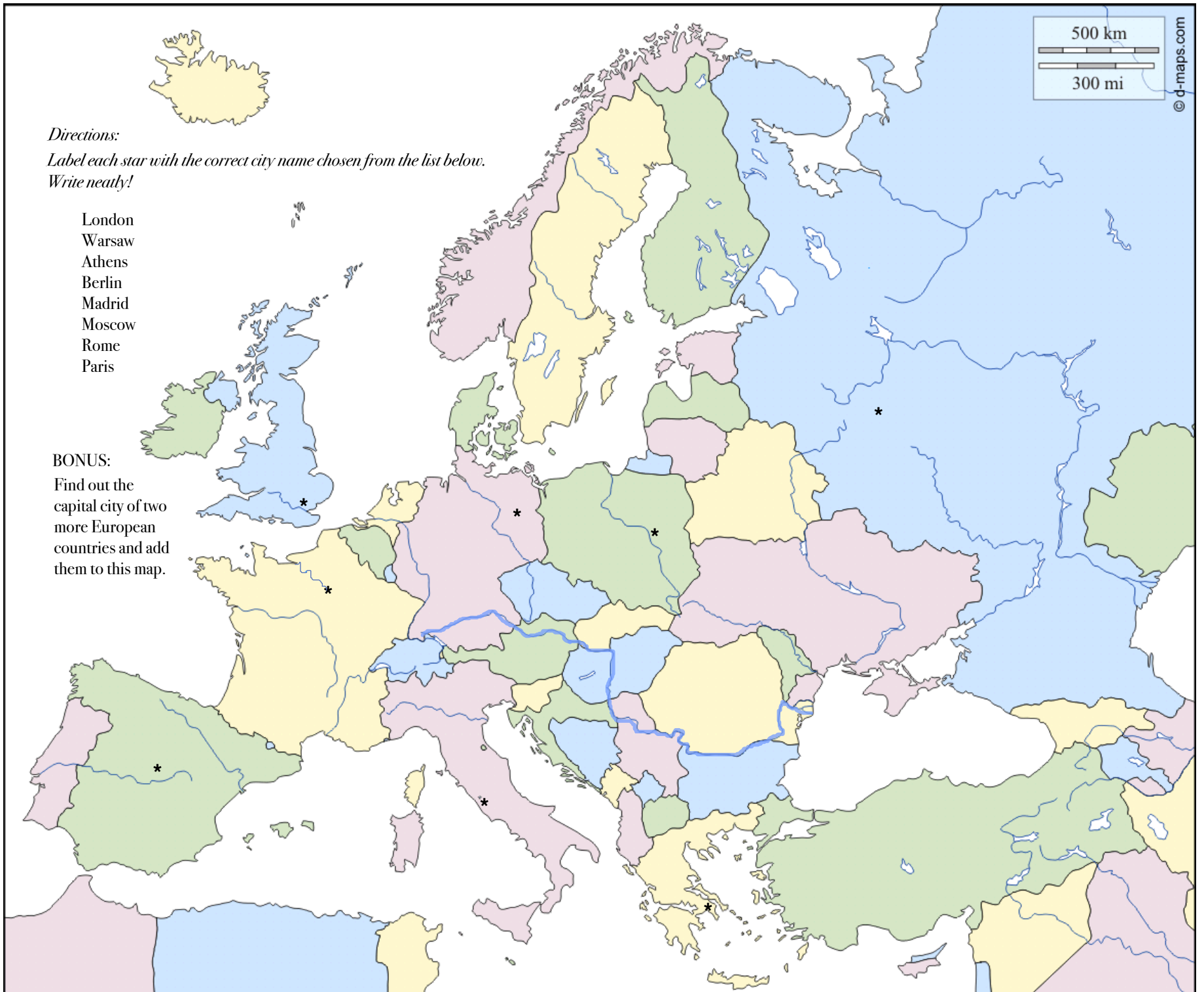
A review quiz for the 2 units

Units 15-18: South America

Practice map for each unit

A review quiz for all 4 units





Directions:

Label each star with the correct city name chosen from the list below.

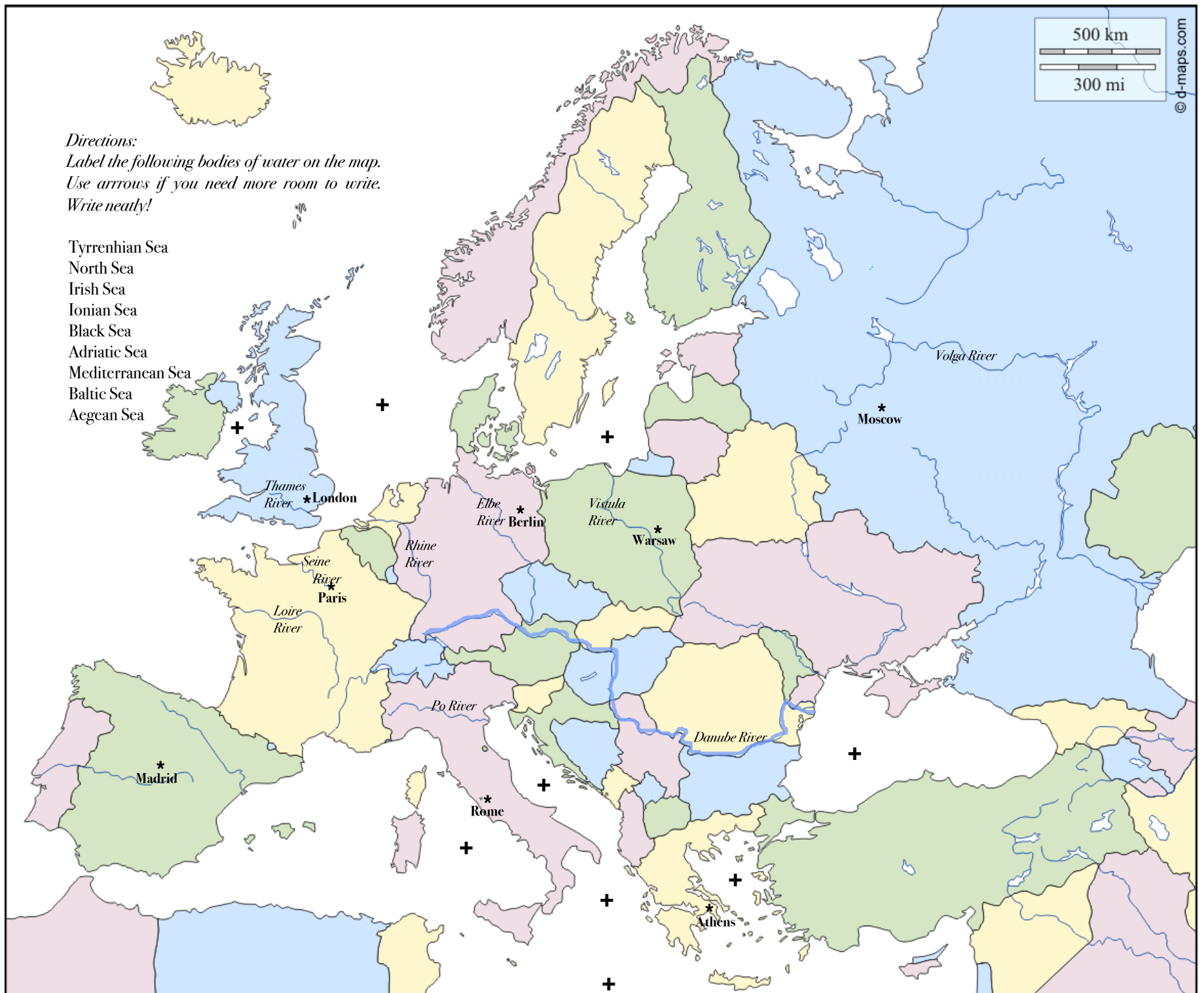
Write neatly!

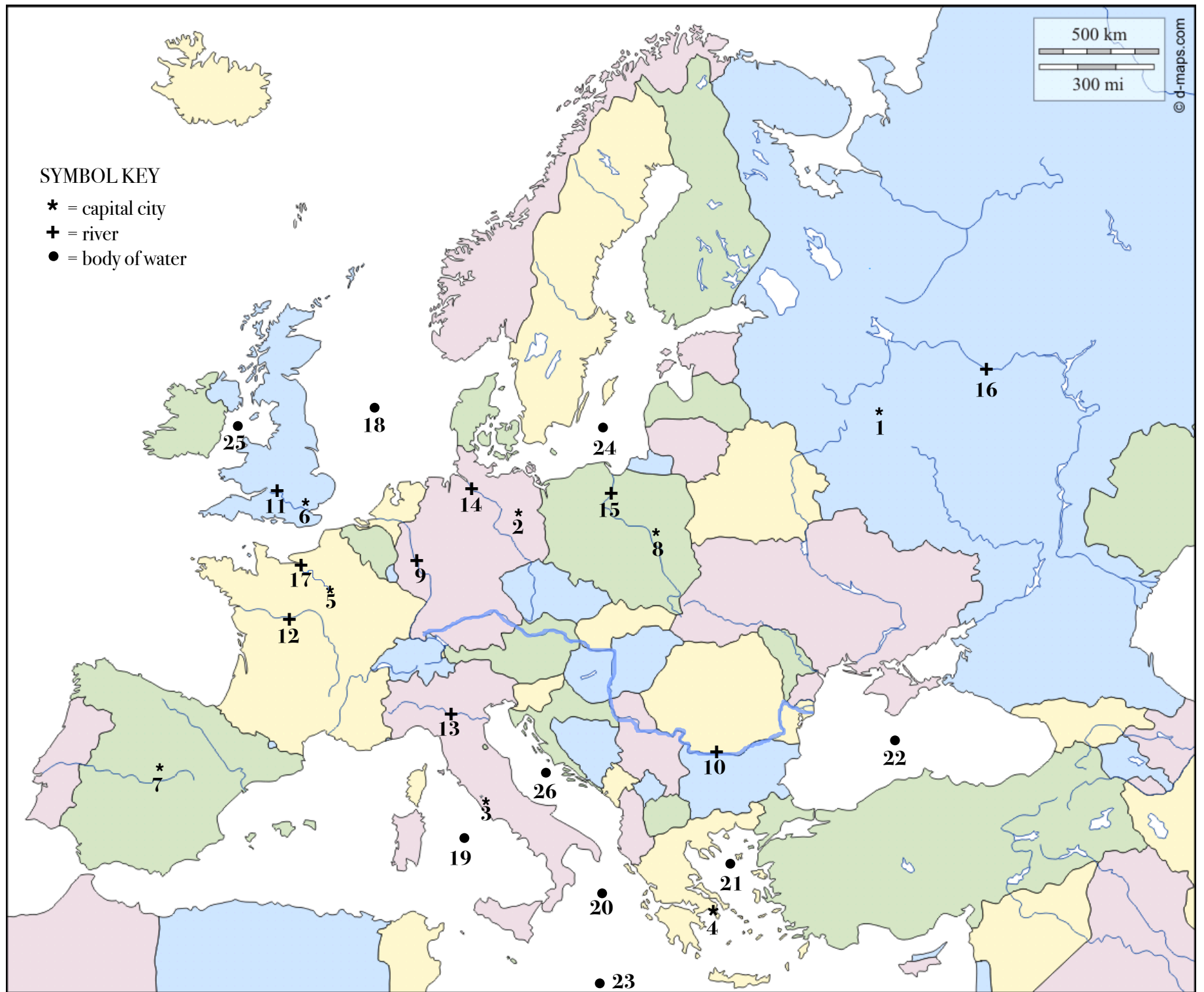
London
Warsaw
Athens
Berlin
Madrid
Moscow
Rome
Paris

BONUS:

Find out the
capital city of two
more European
countries and add
them to this map.







Review Quiz
Units 10-12

Name: _____

Directions: Using the map labelled, "Units 10-12 Review Quiz," write the numbers on the lines that correspond with each location.

Moscow _____

Berlin _____

Madrid _____

Paris _____

London _____

Rome _____

Athens _____

Warsaw _____

Thames River _____

Vistula River _____

Volga River _____

Po River _____

Seine River _____

Rhine River _____

Loire River _____

Elbe River _____

Danube River _____

Irish Sea _____

Black Sea _____

Baltic Sea _____

Tyrrhenian Sea _____

Ionian Sea _____

Aegean Sea _____

Mediterranean Sea _____

North Sea _____

Adriatic Sea _____

Answer Key

Review Quiz

Units 10-12

Name: _____

Directions: Using the map labelled, "Units 10-12 Review Quiz," write the numbers on the lines that correspond with each location.

Moscow __1__

Irish Sea __25__

Berlin __2__

Black Sea __22__

Madrid __7__

Baltic Sea __24__

Paris __5__

Tyrrhenian Sea __19__

London __6__

Ionian Sea __20__

Rome __3__

Aegean Sea __21__

Athens __4__

Mediterranean Sea __23__

Warsaw __8__

North Sea __18__

Adriatic Sea __26__

Thames River __11__

Vistula River __15__

Volga River __16__

Po River __13__

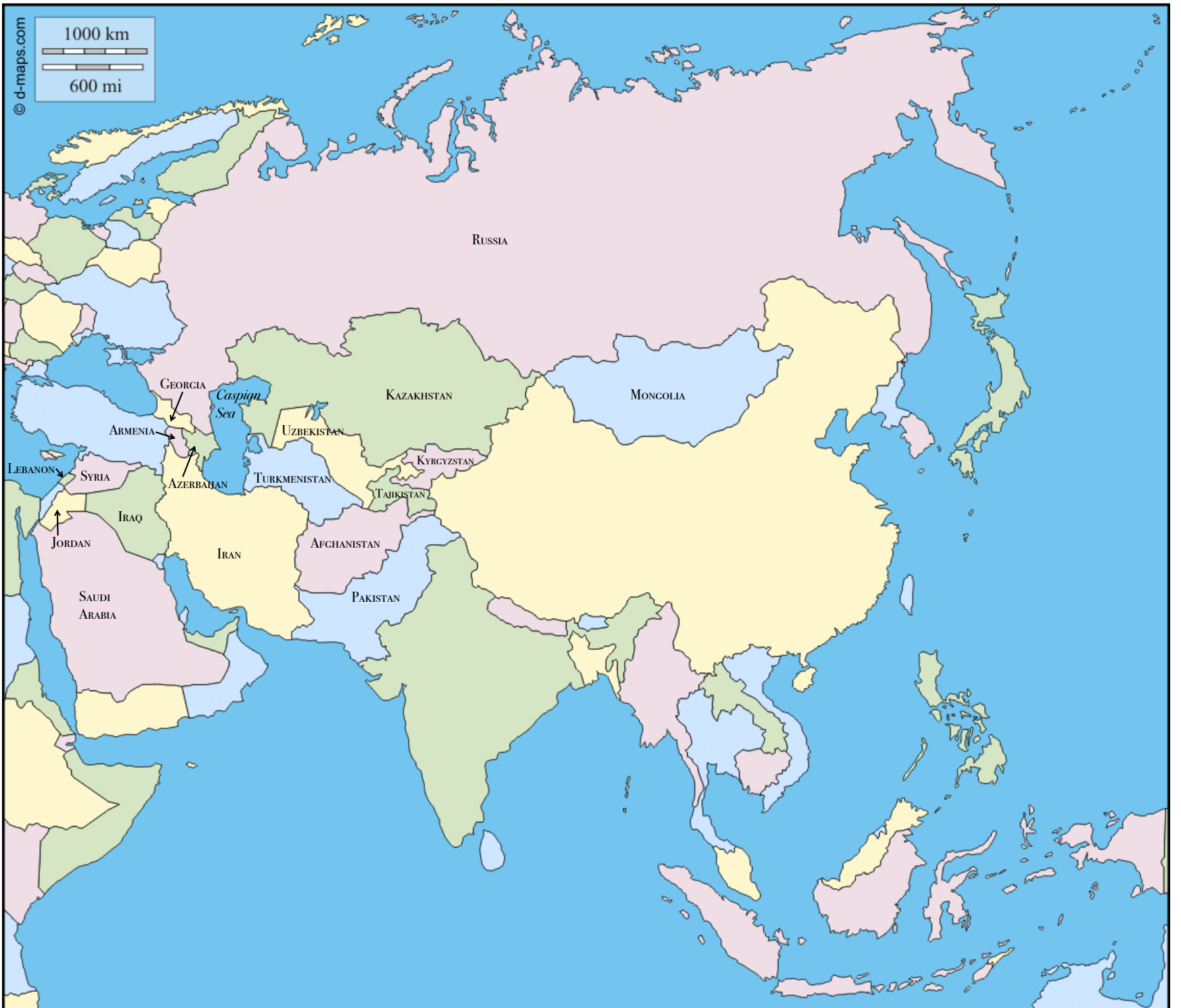
Seine River __17__

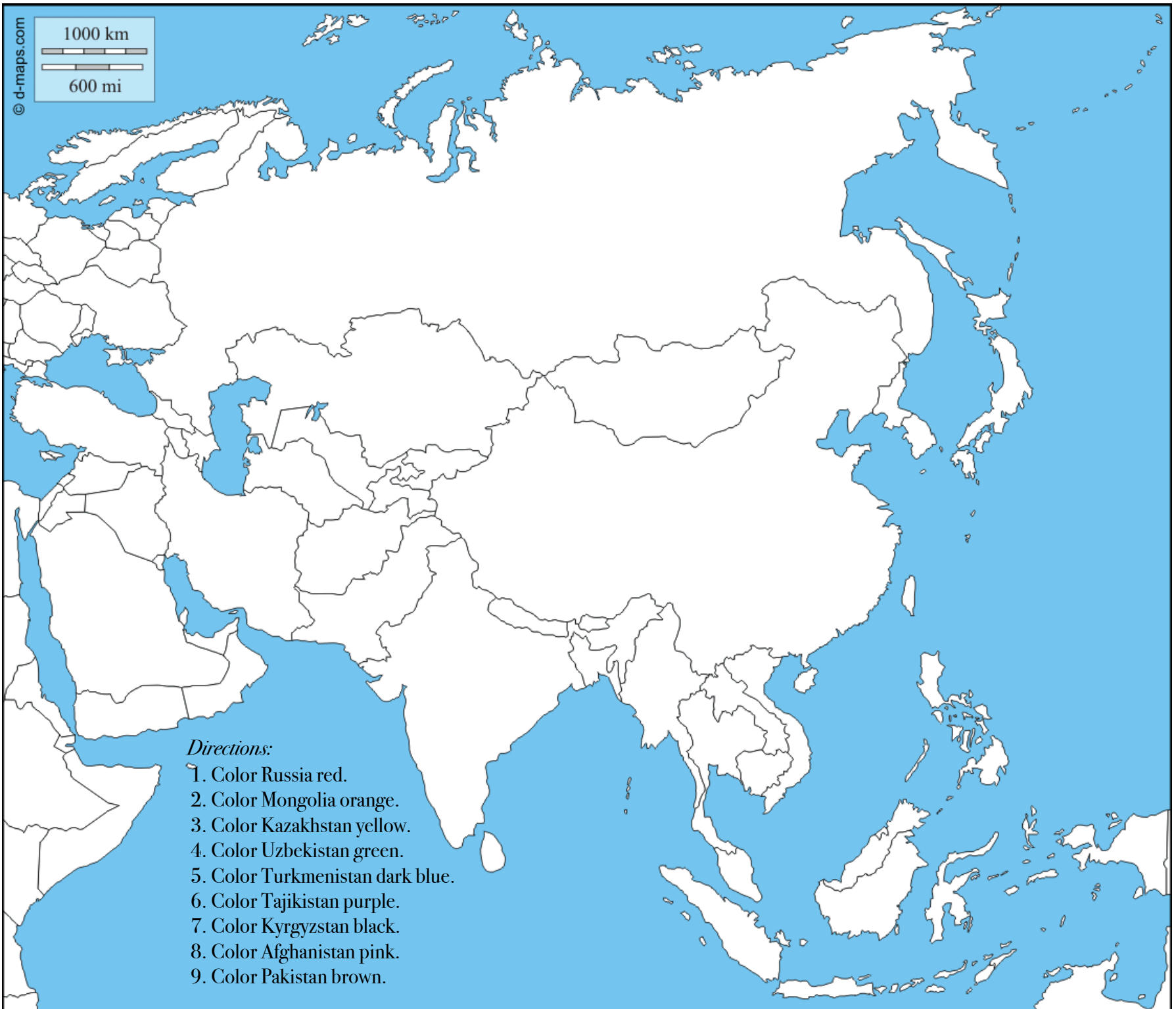
Rhine River __9__

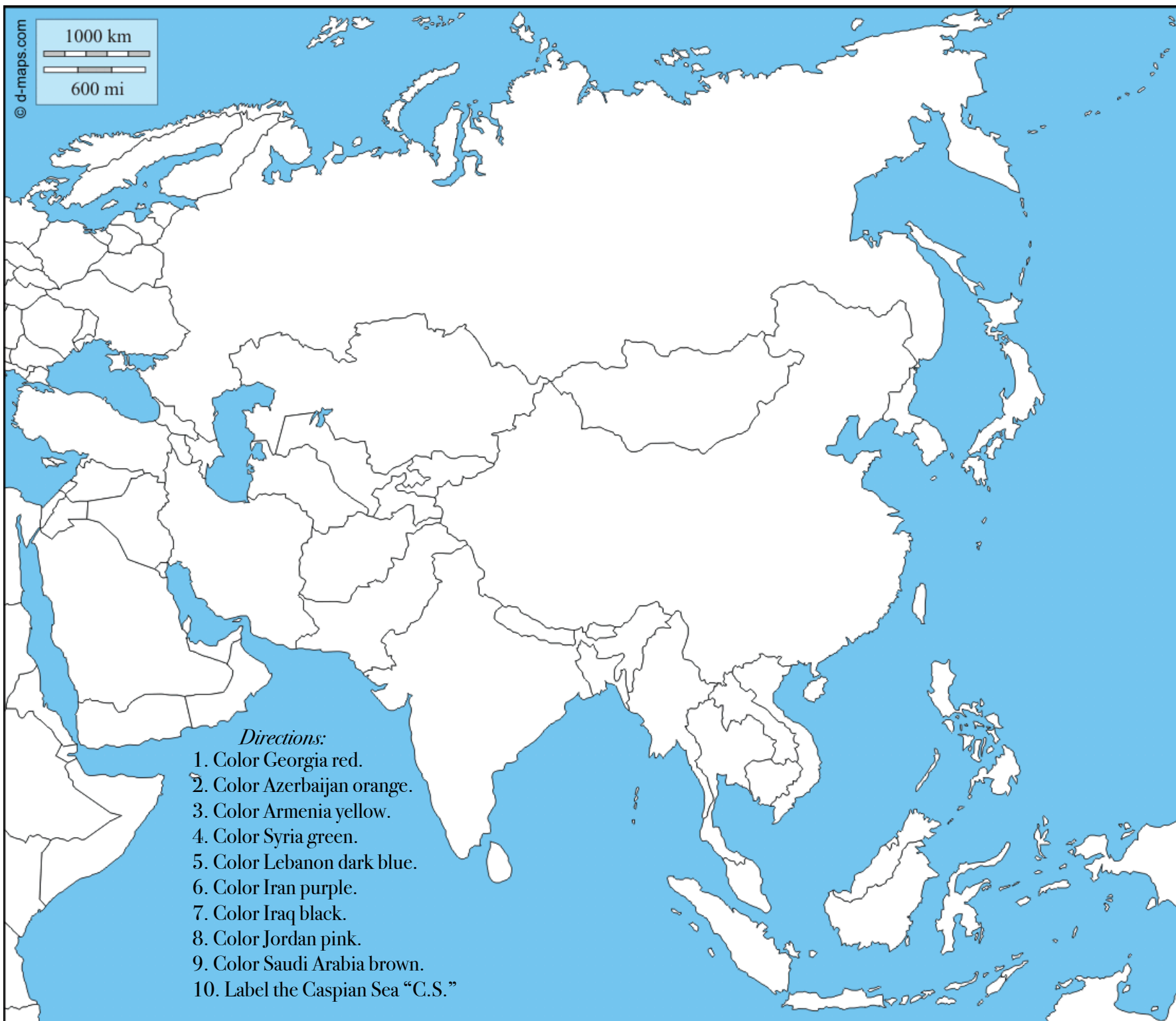
Loire River __12__

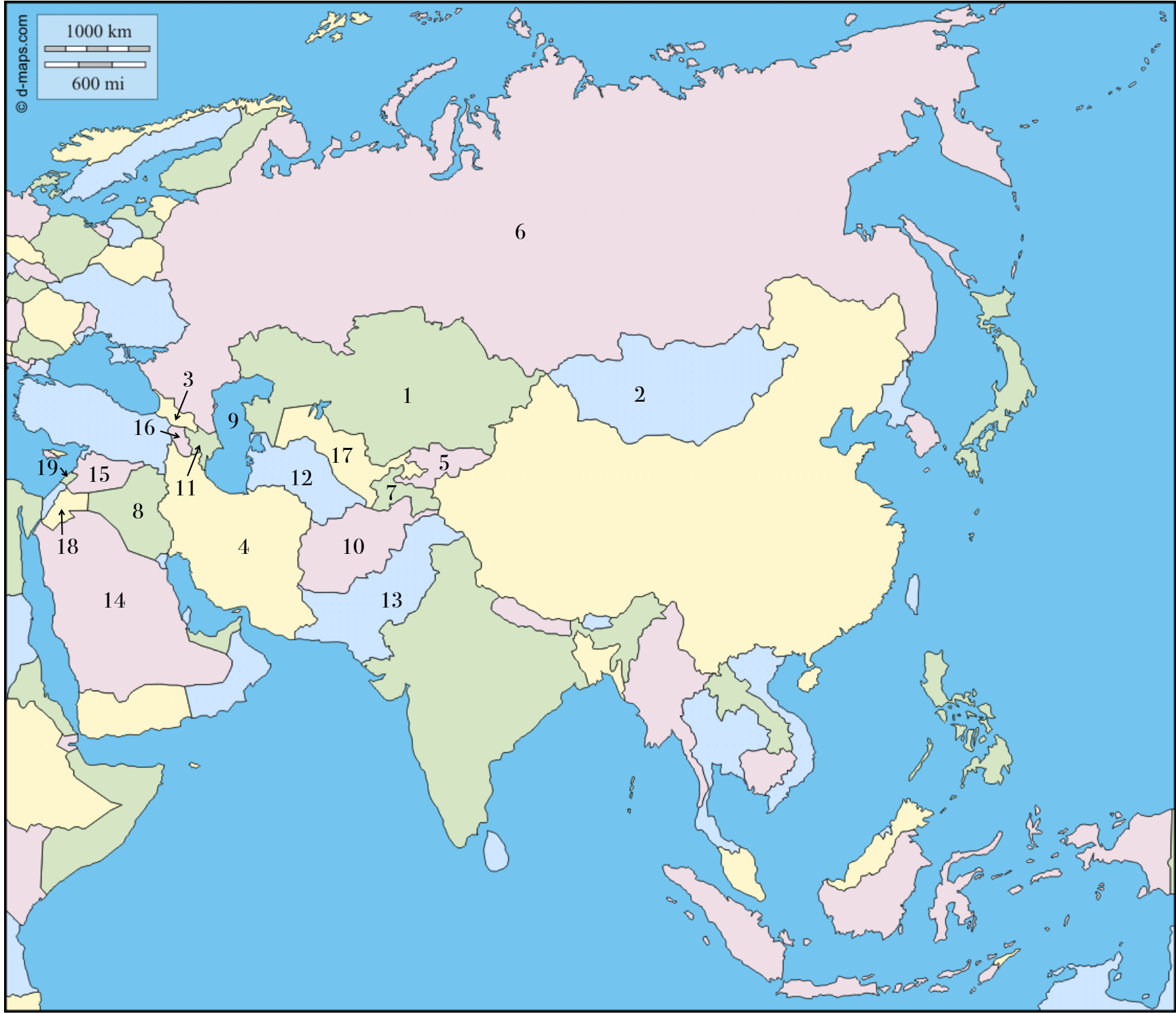
Elbe River __14__

Danube River __10__









Review Quiz
Units 13-14

Name: _____

Directions: Using the map labelled, "Units 13-14 Review Quiz," write the numbers on the lines that correspond with each location.

Russia _____

Syria _____

Afghanistan _____

Armenia _____

Lebanon _____

Iran _____

Kazakhstan _____

Azerbaijan _____

Turkmenistan _____

Georgia _____

Iraq _____

Uzbekistan _____

Jordan _____

Saudi Arabia _____

Tajikistan _____

Pakistan _____

Caspian Sea _____

Mongolia _____

Kyrgyzstan _____

Answer Key
Review Quiz
Units 13-14

Name: _____

Directions: Using the map labelled, "Units 13-14 Review Quiz," write the numbers on the lines that correspond with each location.

Russia __6__

Syria _15__

Afghanistan __10__

Armenia __16__

Lebanon __19__

Iran __4__

Kazakhstan __1__

Azerbaijan __11__

Turkmenistan __12__

Georgia __3__

Iraq __8__

Uzbekistan __17__

Jordan __18__

Saudi Arabia __14__

Tajikistan __7__

Pakistan __13__

Caspian Sea __9__

Mongolia __2__

Kyrgyzstan __5__



For information purposes only - to put what we've learned in context of the rest of Asia.



*Directions:*

1. Color Brazil red.
2. Color French Guiana orange.
3. Color Suriname yellow.
4. Color Guyana green.
5. Color Venezuela purple.
6. Color Colombia brown.
7. Color Ecuador pink.
8. Label the city of Bogotá.
9. Label the city of Brasília.

1000 km

600 mi

*Directions:*

1. Color Peru red.
2. Color Bolivia orange.
3. Color Paraguay yellow.
4. Color Uruguay green.
5. Color Chile purple.
6. Color Argentina brown.
7. Label the city of Lima.
8. Label the city of Santiago.
9. Label the city of Buenos Aires.

1000 km

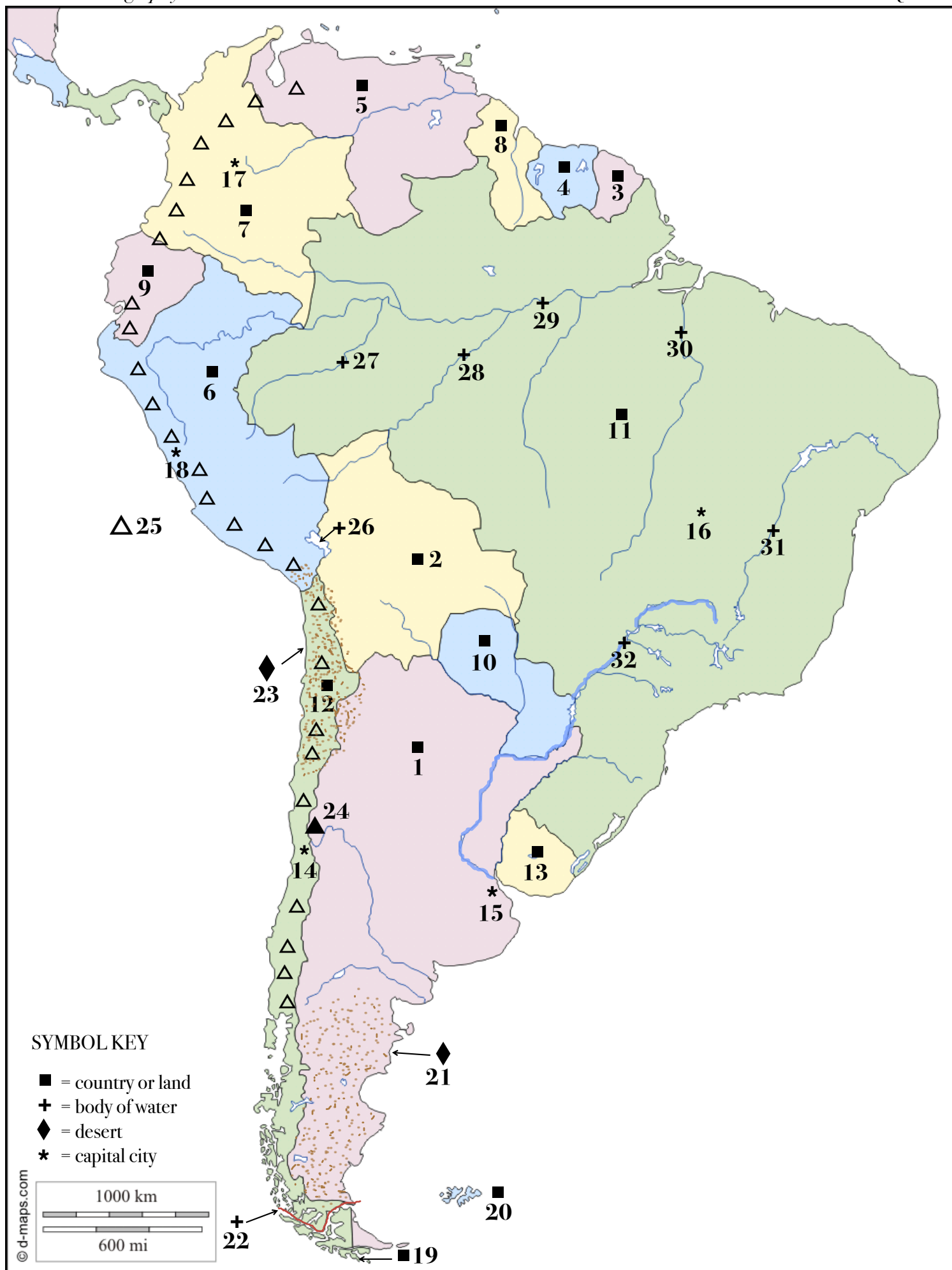
600 mi



*Directions:*

1. Lake Titicaca is not drawn on this map. Draw a circle to show where it should go.
2. Draw open triangles to show the location of the Andes Mountains.
3. Draw a black triangle to show the location of Mount Aconcagua.
4. With red colored pencil, shade in the location of the Atacama Desert.
5. With brown colored pencil, shade in the location of the Patagonian Desert.
6. Draw a square around the Falkland Islands.
7. Draw an arrow pointing to Cape Horn.
8. Use red to trace the Strait of Magellan.





Review Quiz
Units 15-18

Name: _____

Directions: Using the map labelled, "Units 15-18 Review Quiz," write the numbers on the lines that correspond with each location.

Peru _____

Lake Titicaca _____

Lima _____

Sao Francisco River _____

Bolivia _____

Madeira River _____

Paraguay _____

Andes Mountains _____

Colombia _____

Mount Aconcagua _____

Uruguay _____

Purus River _____

Chile _____

Parana River _____

Suriname _____

Atacama Desert _____

Santiago _____

Tocantins River _____

Venezuela _____

Patagonian Desert _____

Brasilia _____

Amazon River _____

Argentina _____

Falkland Islands _____

Buenos Aires _____

Strait of Magellan _____

French Guiana _____

Cape Horn _____

Guyana _____

Bogota _____

Brazil _____

Ecuador _____

Answer Key

Review Quiz

Units 15-18

Name: _____

Directions: Using the map labelled, "Units 15-18 Review Quiz," write the numbers on the lines that correspond with each location.

Peru ____6____

Lima ____18____

Bolivia ____2____

Paraguay ____10____

Colombia ____7____

Uruguay ____13____

Chile ____12____

Suriname ____4____

Santiago ____14____

Venezuela ____5____

Brasilia ____16____

Argentina ____1____

Buenos Aires ____15____

French Guiana ____3____

Guyana ____8____

Bogota ____17____

Brazil ____11____

Ecuador ____9____

Lake Titicaca ____26____

Sao Francisco River ____31____

Madeira River ____28____

Andes Mountains ____25____

Mount Aconcagua ____24____

Purus River ____27____

Parana River ____32____

Atacama Desert ____23____

Tocantins River ____30____

Patagonian Desert ____21____

Amazon River ____29____

Falkland Islands ____20____

Strait of Magellan ____22____

Cape Horn ____19____